

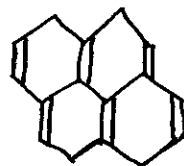
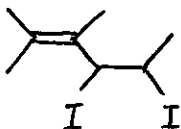
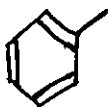
Name: \_\_\_\_\_

14

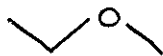

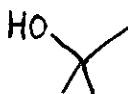
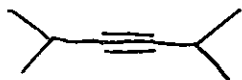
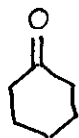
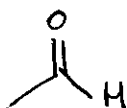
SCH 0A1  
Quiz

1. Write the chemical formula for

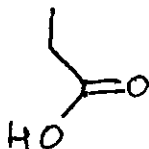
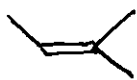
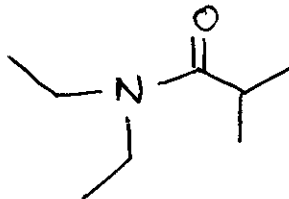
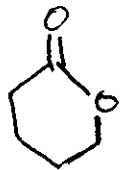
3



2. Identify the functional groups.



10



3. Draw a simplified structure for a six carbon alcohol with a total of twelve hydrogens.

1