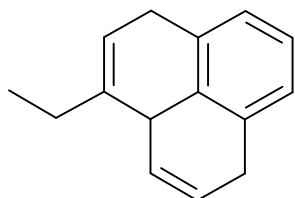


Name: _____

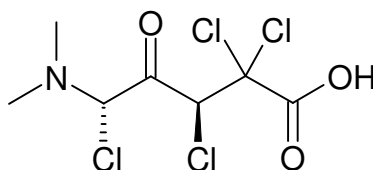
/16 = %

Organic Structure Quiz #2 - SCH 4U

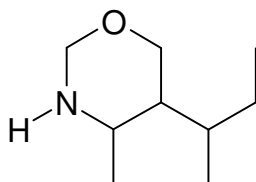
Show correct chemical formula (i.e. $C_3H_4OCl_3Br$)



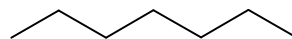
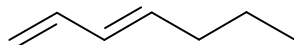
/2



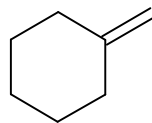
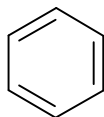
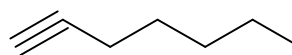
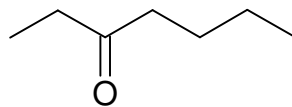
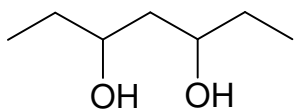
/3



/3



/8



$$H = [2C + 2] - [2 \times \text{deg. unsat.}] + N - X$$