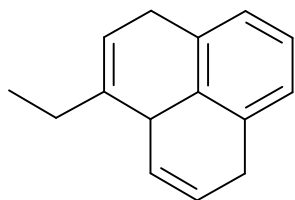


Name: _____

/16 = %

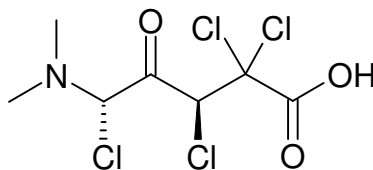
Organic Structure Quiz #2 - SCH 4U

Show correct chemical formula (i.e. $C_3H_4OCl_3Br$)



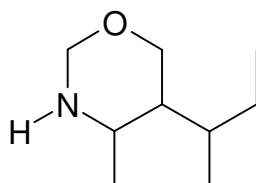
$C_{15}H_{16}$

/2



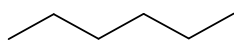
/3

$C_7H_9NO_3Cl_4$

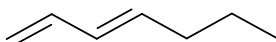


/3

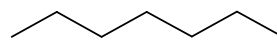
$C_9H_{19}NO$



C_6H_{14}

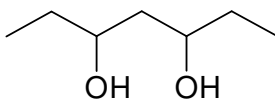


C_7H_{12}

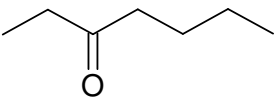


C_7H_{16}

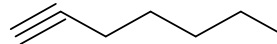
/8



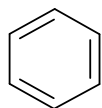
$C_7H_{16}O_2$



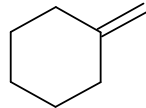
$C_7H_{14}O$



C_7H_{12}



C_6H_6



C_7H_{12}

$$H = [2C + 2] - [2 \times \text{deg. unsat.}] + N - X$$