

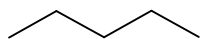
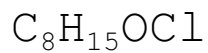
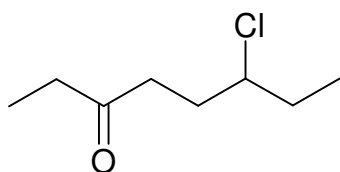
/8

Name: _____

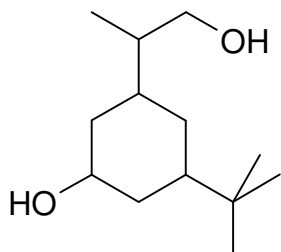
Organic Structure to Formula Quiz #1

$$H = [2C + 2] - [2 \times \text{deg. unsat}] + N - X$$

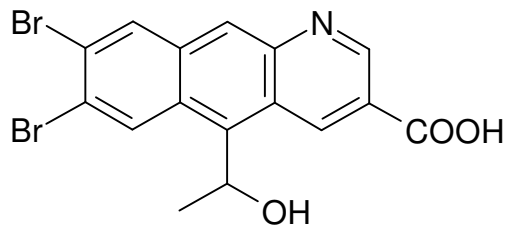
Write correct formula for each structure (the first one is done as an example):



/2



/3



/3
