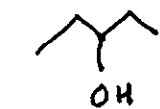


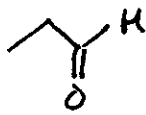
Name: \_\_\_\_\_

## Functional Groups Quiz SCH 4U

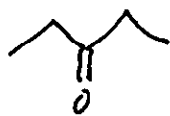
Provide the name of each family of organic compounds



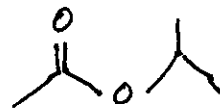
alcohol



aldehyde



ketone



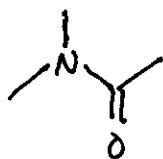
ester



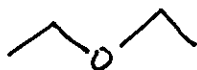
amine



alkane



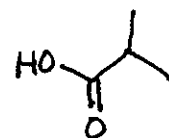
amide



ether



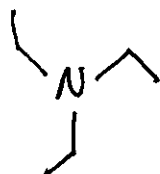
alkene



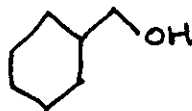
carboxylic acid



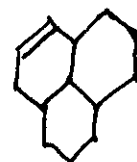
alkyne



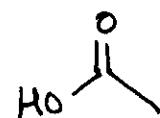
amine



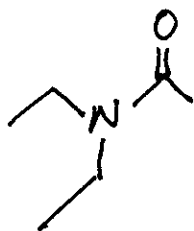
alcohol



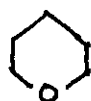
alkene



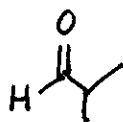
carboxylic acid



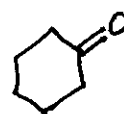
amide



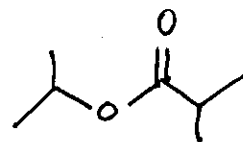
ether



aldehyde



ketone



ester