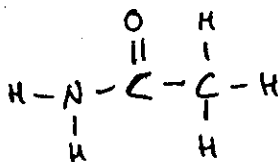


Name: _____

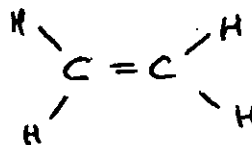
SCH 4C Organic Functional Group Quiz #1

1. Using the list provided, place the correct name for the functional group beside each structure:

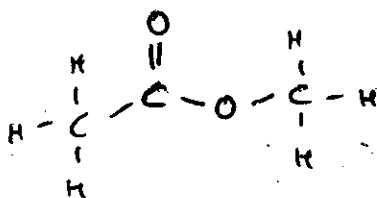
- ether ✓
- alcohol ✓
- alkane ✓
- ester ✓
- amine ✓
- carboxylic acid ✓
- aldehyde ✓
- alkene ✓
- ketone ✓
- amide ✓
- alkyne ✓



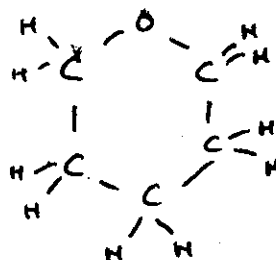
amide



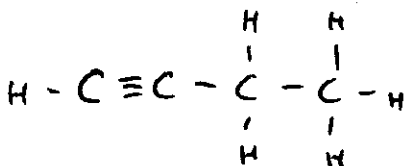
alkene



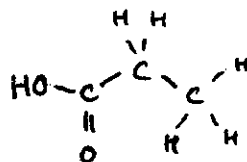
ester



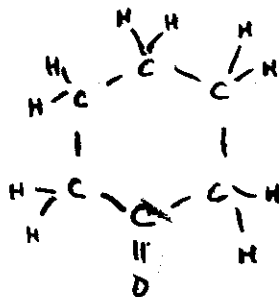
ether



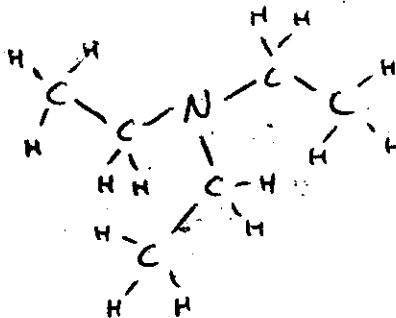
alkyne



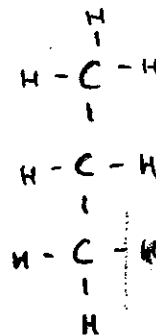
carboxylic acid



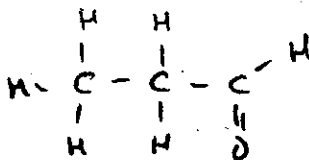
ketone



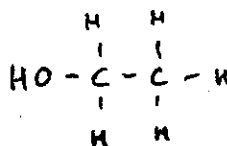
amine



alkane



aldehyde



alcohol