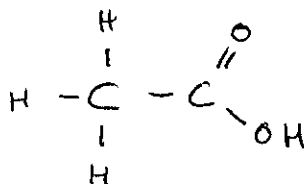


Name: _____

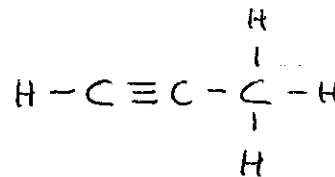
SCH 4C Organic Functional Group Quiz #1

1. Using the list provided, place the correct name for the functional group beside each structure:

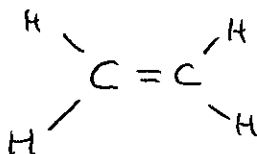
- ether
- alcohol
- alkane
- ester
- amine
- carboxylic acid
- aldehyde
- alkene
- ketone
- amide
- alkyne



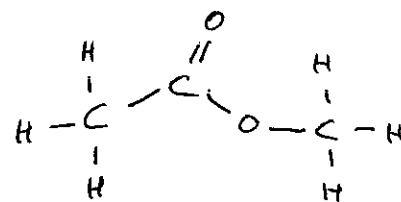
carboxylic acid



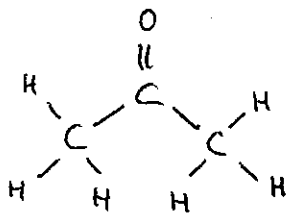
alkyne



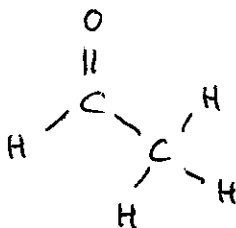
alkene



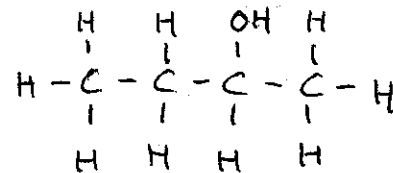
ester



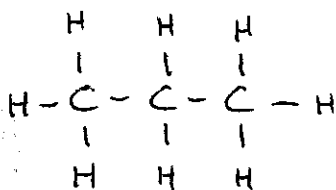
ketone



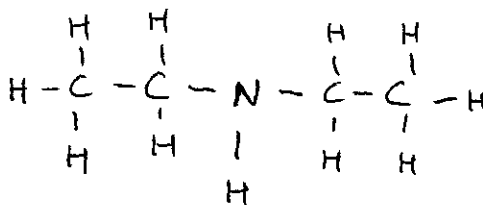
aldehyde



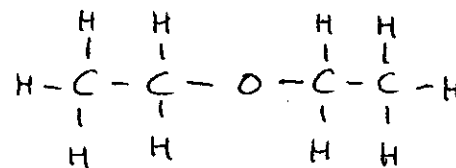
alcohol



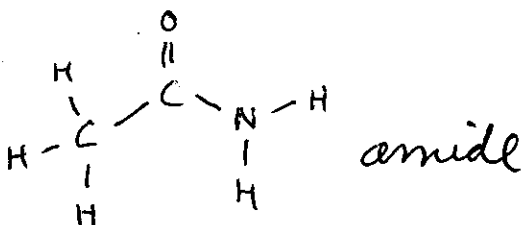
alkane



amine



ether



amide