

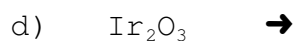
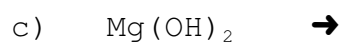
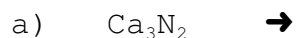
Name: _____

SCH 4C Balancing Quiz

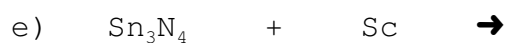
1. Complete each synthesis reaction:



2. Complete each decomposition reaction:



3. Complete each single replacement reaction:



4. Complete each double replacement reaction:

