

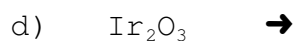
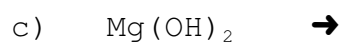
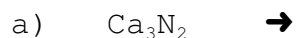
Name: _____

SCH 4C Balancing Quiz

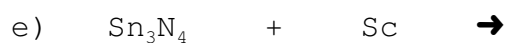
1. Complete each synthesis reaction:




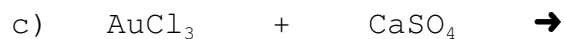
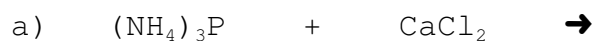
2. Complete each decomposition reaction:



3. Complete each single replacement reaction:



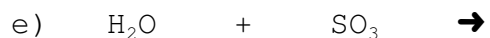
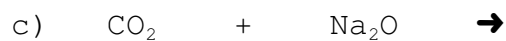
4. Complete each double replacement reaction:



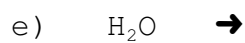
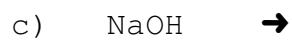
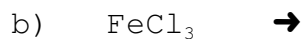
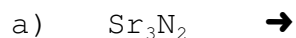
Name: _____

SCH 4C Balancing Quiz

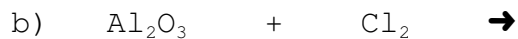
1. Complete each synthesis reaction:




2. Complete each decomposition reaction:



3. Complete each single replacement reaction:



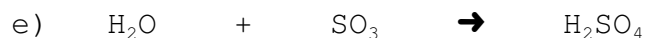
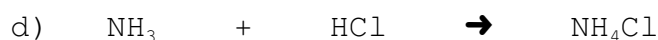
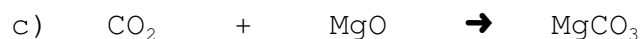
4. Complete each double replacement reaction:



Name: _____

SCH 4C Balancing Quiz



1. Complete each synthesis reaction:



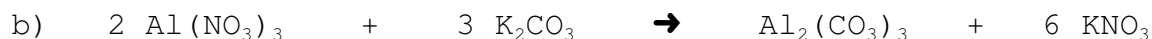
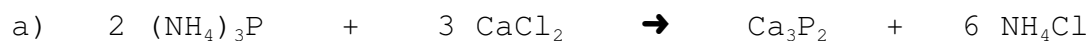
2. Complete each decomposition reaction:



3. Complete each single replacement reaction:




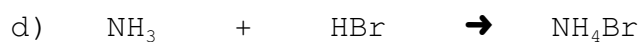


4. Complete each double replacement reaction:






Name: _____

SCH 4C Balancing Quiz

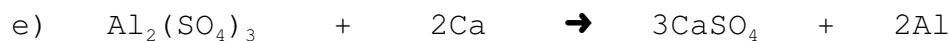
1. Complete each synthesis reaction:



2. Complete each decomposition reaction:



3. Complete each single replacement reaction:



4. Complete each double replacement reaction:

