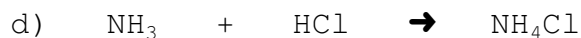
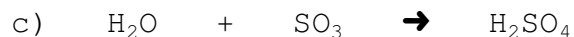
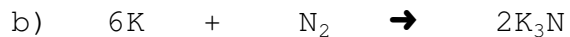
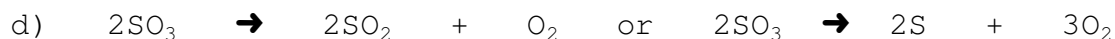


MORE BALANCING PROBLEMS

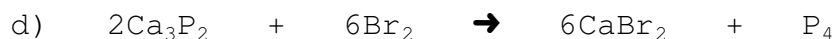
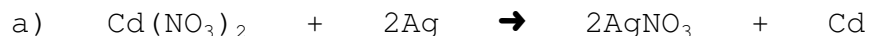
1. Complete each of the following synthesis reactions and balance:



2. Complete each of the following decomposition reactions and balance:



3. Complete each of the following single replacement reactions and balance:



4. Complete each of the following double replacement reaction and balance:

