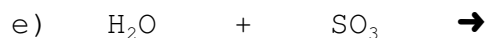
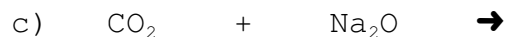
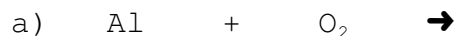


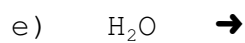
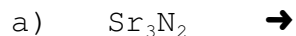
Balancing Completion Quiz #4

1. Complete each synthesis reaction:



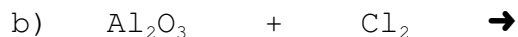
/7

2. Complete each decomposition reaction:



/9

3. Complete each single replacement reaction:



/8

4. Complete each double replacement reaction:



/8