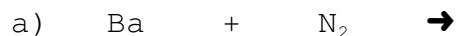


/32 = _____%

Name: _____

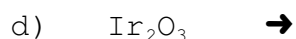
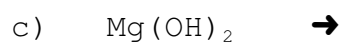
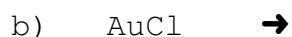
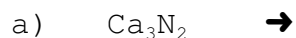
Balancing Completion Quiz #3

1. Complete each synthesis reaction:



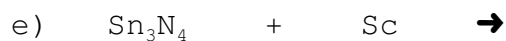
/7

2. Complete each decomposition reaction:



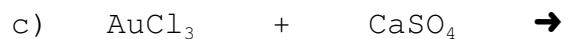
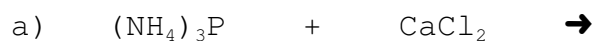
/9

3. Complete each single replacement reaction:



/8

4. Complete each double replacement reaction:



/8