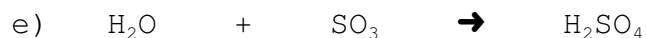
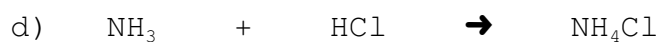


Name: \_\_\_\_\_

### Balancing Completion Quiz #3


1. Complete each synthesis reaction:



2. Complete each decomposition reaction:



3. Complete each single replacement reaction:



4. Complete each double replacement reaction:

