

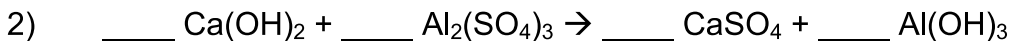
Name: _____

Types of Reactions Quiz

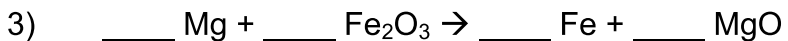
Balance the following equations and indicate the type of reaction taking place:



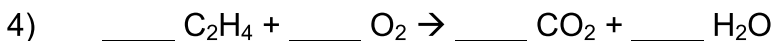
Type of reaction: _____



Type of reaction: _____



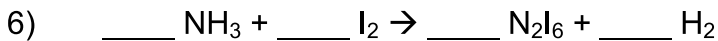
Type of reaction: _____



Type of reaction: _____



Type of reaction: _____



Type of reaction: _____



Type of reaction: _____



Type of reaction: _____

synthesis
decomposition

single replacement
double replacement

hydrocarbon combustion