

Name: _____

Types of Reactions Quiz

Balance the following equations and indicate the type of reaction taking place:



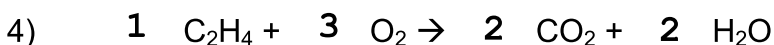
Type of reaction: double replacement



Type of reaction: double replacement



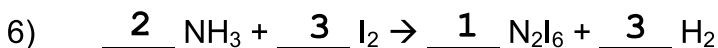
Type of reaction: single replacement



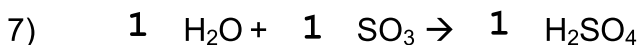
Type of reaction: hydrocarbon combustion



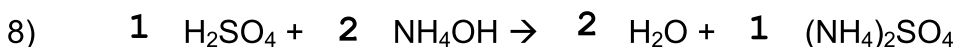
Type of reaction: decomposition



Type of reaction: single replacement



Type of reaction: synthesis



Type of reaction: double displacement

synthesis
decomposition

single replacement
double replacement

hydrocarbon combustion